



Two shops, Food Mart and Jim's Store, both sell Kreemy Yoghurts.

Food Mart
Kreemy Yoghurts



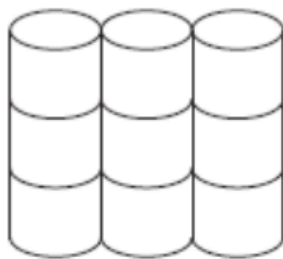
5 for £1.80

Jim's Store
Kreemy Yoghurts

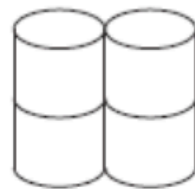


3 for £1.05

At which shop are Kreemy Yoghurts the better value for money?
You must show all your working.



Pack of 9
toilet rolls
£4.23



Pack of 4
toilet rolls
£1.96

A pack of 9 toilet rolls costs £4.23
A pack of 4 toilet rolls costs £1.96


Which pack gives the better value for money?

You must show all your working.

T-shirts normally cost £12 each.

Two shops have a special offer on these T-shirts.

T-Shirts-R-Us



Special offer
Pay for two T-shirts and get one free.
Pay for five T-shirts and get three free

Budget Shirt Company



Special offer
1/3 off normal price

Stephen wants to buy 30 T-shirts.

Work out at which shop, Stephen will get the better deal.
You must show clearly how you got your answer.

Potatoes cost £9 for a 12.5 kg bag at a farm shop.
The same type of potatoes cost £1.83 for a 2.5 kg bag at a supermarket.

Where are the potatoes the better value, at the farm shop or at the supermarket?
You must show your working.

Radox Handwash cost is on offer at Boots and Superdrug.

Boots 500ml bottles on offer at 3 for 2

Superdrug 300ml bottles on offer at buy one get one free

Where is the handwash better value, at Boots or Superdrug?
You must show your working.

Carrots cost £1 for a 1.2 kg bag at Tesco.

The same type of carrots cost 77 pence for a 700 g bag at ASDA.

Where are the Carrots better value.
You must show your working.

A shop has two different special offers on milk.



75p

Pay for 2 bottles
get 1 bottle free



£1.28

Pay for 1 bottle
get 1 bottle half price

Which offer gives the better value for money?
You must show how you get your answer.

5 Jo is going to buy 15 rolls of wallpaper.

Here is some information about the cost of rolls of wallpaper from each of two shops.

<p style="text-align: center;">Chic Decor</p> <p style="text-align: center;">3 rolls for £36</p>

<p style="text-align: center;">Style Papers</p> <p style="text-align: center;">Pack of 5 rolls normal price £70</p> <p style="text-align: center;">12% off the normal price</p>
--

Jo wants to buy the 15 rolls of wallpaper as cheaply as possible.

Should Jo buy the wallpaper from Chic Decor or from Style Papers?
You must show how you get your answer.

Here are two special offers for buying dog food.

<p style="text-align: center;">Special offer A</p> <p>Normally \$1.40 a tin</p> <p>Special offer Buy 1 tin, get 1 tin half price</p>
--

<p style="text-align: center;">Special offer B</p> <p>Normally pack of 6 tins for \$7.20</p> <p>Special offer 20% off each pack of 6 tins</p>

Gaspar buys 24 tins of dog food using special offer **A**.

Anna buys 24 tins of dog food using special offer **B**.

Work out the difference between the amount that Gaspar pays and the amount that Anna pays.